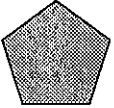


Lower - August 30th

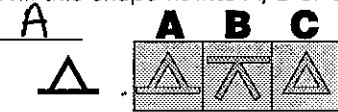


Answers

MONDAY

- Time?
- $8 \times 2 = 16$
- $5 \times 4 = 20$
- $6 + 3 = 9$
- $16 \div 4 = 4$
- $15 \div 5 = 3$
- Double 20. 40
- Halve 60. 30
- Is 15 odd or even? odd
- A square has 4 equal sides.
 true false
- 

Name this shape.
Pentagon
- 30 mm = 3 cm
- Measure this line. 4 cm
- Summer, Autumn, Winter and Spring are the four seasons.
- Days in a year? 365
- Weeks in a year? 52
- $27 - 10 = 17$
- Write one hundred and sixty-seven as a numeral.
167
- 6 pairs of shoes = 12 shoes
- $68 + 10 = 78$

TUESDAY

- Time?
- $6 \times 2 = 12$
- $8 \times 1 = 8$
- $4 + 5 = 9$
- $15 \div 3 = 5$
- $30 \div 3 = 10$
- $8 - 4 = 4$
- $24 - 10 = 14$
- Will this shape fit into A, B or C?

- Is 2 odd or even? even
- Measure this line. 1 cm
- $10 \text{ mm} = 1 \text{ cm}$
- Name this shape. 
Hexagon
- 

Name this shape.
square
- Halve 22. 11
- Double 7. 14
- 60 seconds = one minute
- Hours in a day? 24
- $7 - 3 = 4$
- $100 \text{ cm} = 1 \text{ m}$

WEDNESDAY

- Time?
- $7 - 1 = 6$
- $97 - 10 = 87$
- You eat 2 eggs from a dozen. How many left?
10
- $6 \times 0 = 0$
- $4 \times 3 = 12$
- Months in a year? 12
- $40 \div 10 = 4$
- $9 + 3 = 12$
- $5 + 6 = 11$
- $3 + 7 = 10$
- Write one hundred and seventy-nine as a numeral.
179
- Is 7 odd or even? odd
- Is a square a quadrilateral?
yes
- Pentagon = 5 sides
- What shape has 3 sides?
Triangle
- Double 6. 12
- $38 + 10 = 48$
- Days in a fortnight? 14
- 60 minutes = 1 hour

THURSDAY

- Time?
- $10 + 27 = 37$
- Halve 20. 10
- Is 15 odd or even? odd
- Days in a leap year? 366
- Days in a week? 7
- $93 - 10 = 83$
- $24 - 10 = 14$
- $3 \times 5 = 15$
- $6 \times 3 = 18$
- $90 \div 9 = 10$
- $6 \div 3 = 2$
- Hexagon = 6 sides
- What 2-D shape has 5 sides?
(a) pentagon (b) hexagon (c) square
(a) pentagon
- $2 + 9 = 11$
- You break 5 eggs out of a dozen. How many are left?
7
- $1 \text{ m} = 100 \text{ cm}$
- $10 - 4 = 6$
- Measure this line.
3 cm
- $300 + 50 + 2 = 352$

ANSWERS