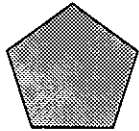


# Lower - 6th Sept

## MONDAY

- Time? \_\_\_\_\_
- In 561, does the 6 = 6 or 60?  
\_\_\_\_\_
- In 73, is the place value of the 7 at tens or ones?  
\_\_\_\_\_
- $10 + 2 =$  \_\_\_\_\_
- $5 \times 3 =$  \_\_\_\_\_
- $3 \times 7 =$  \_\_\_\_\_
- $5 + 4 =$  \_\_\_\_\_
- Write one hundred and forty-eight as a numeral.  
\_\_\_\_\_

- $21 + 3 =$  \_\_\_\_\_
- Weeks in a year? \_\_\_\_\_
- Hours in a day? \_\_\_\_\_
- $8 + 5 =$  \_\_\_\_\_
- $25 - 5 =$  \_\_\_\_\_
- Hexagon = \_\_\_\_\_ sides
- \_\_\_\_\_



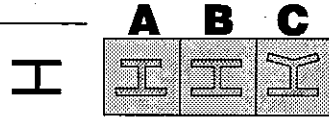
Name this 2-D shape.  
\_\_\_\_\_

- Measure this line.  
\_\_\_\_\_ cm
- $300 + 300 =$  \_\_\_\_\_
- \_\_\_\_\_ cm = 1 m
- Take \$5.00 from \$11.00 = \$ \_\_\_\_\_
- $9 - 5 =$  \_\_\_\_\_




## TUESDAY

- Time? \_\_\_\_\_
- $8 \times 3 =$  \_\_\_\_\_
- $3 + 2 =$  \_\_\_\_\_
- $21 + 10 =$  \_\_\_\_\_
- Will this shape fit into A, B or C?  
\_\_\_\_\_



- In 179, does the meaning of 7 = 70 or 7?  
\_\_\_\_\_
- $8 + 2 =$  \_\_\_\_\_
- Hours in two days? \_\_\_\_\_
- $18 + 3 =$  \_\_\_\_\_
- $16 + 2 =$  \_\_\_\_\_
- $50 + 20 =$  \_\_\_\_\_
- Days in a year? \_\_\_\_\_
- $4 \times 2 =$  \_\_\_\_\_
- \_\_\_\_\_



Name this 3-D shape.

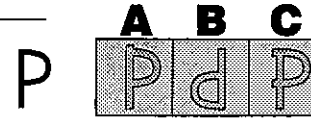
tr \_\_\_\_\_ gul \_\_\_\_\_ pr \_\_\_\_\_ m

- $1 \text{ m} =$  \_\_\_\_\_ cm
- How many months in half a year?  
\_\_\_\_\_
- Measure this line.  
\_\_\_\_\_ cm
- Octagon = \_\_\_\_\_ sides
- $11 \times 5 =$  \_\_\_\_\_
- $400 - 100 =$  \_\_\_\_\_

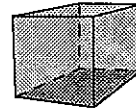


## WEDNESDAY

- Time? \_\_\_\_\_
- Square = \_\_\_\_\_ sides
- Halve 6. \_\_\_\_\_
- $11 + 10 =$  \_\_\_\_\_
- $94 - 10 =$  \_\_\_\_\_
- In 89, what is the meaning of the 9?  
 900     90     9
- $18 + 9 =$  \_\_\_\_\_
- Months in a year? \_\_\_\_\_
- $9 \times 4 =$  \_\_\_\_\_
- Will this shape fit into A, B or C exactly?  
\_\_\_\_\_



- Is 12 odd or even? \_\_\_\_\_
- $10 - 6 =$  \_\_\_\_\_
- $14 + 7 =$  \_\_\_\_\_
- \_\_\_\_\_



Name this 3-D shape.

re \_\_\_\_\_ gul \_\_\_\_\_

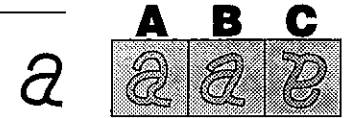
- pr \_\_\_\_\_ m or cu \_\_\_\_\_
- \_\_\_\_\_ minutes = 1 hour
  - Summer, Autumn, \_\_\_\_\_, and Spring are the four seasons.
  - $500 + 400 =$  \_\_\_\_\_
  - Double 15. \_\_\_\_\_
  - Halve 100. \_\_\_\_\_
  - $100 \times 2 =$  \_\_\_\_\_



## THURSDAY

- Time? \_\_\_\_\_
- $4 \times 2 =$  \_\_\_\_\_
- $2 + 4 =$  \_\_\_\_\_
- $25 \div 5 =$  \_\_\_\_\_
- In 34, what is the meaning of the 3?  
 300     30     3

- Will this shape fit into A, B or C exactly?  
\_\_\_\_\_



- $5 + 7 =$  \_\_\_\_\_
- $8 - 2 =$  \_\_\_\_\_
- $91 - 10 =$  \_\_\_\_\_
- Days in a fortnight? \_\_\_\_\_
- Write two hundred and seventy-eight as a numeral.  
\_\_\_\_\_

- $500 - 200 =$  \_\_\_\_\_

- 1 cm = \_\_\_\_\_ mm

- Name this 3-D shape.  
p \_\_\_\_\_ m \_\_\_\_\_



- What is this 2-D shape?  
\_\_\_\_\_



- Octagon = \_\_\_\_\_ sides

- $1 \times 6 =$  \_\_\_\_\_

- $44 \div 11 =$  \_\_\_\_\_

- Double 8. \_\_\_\_\_

- In 540, what is the meaning of the 4?  
 400     40     4