



















MONDAY Date

- What would be the time in 45 minutes?
8.00 
- $10^2 = 100$
- This polygon is known as a
Nonagon 
- On 6.7.06, which month are you in?
July
- $\$20.00 - \$11.80 = \$8.20$
- $100 - 70 = 30$
- (Roman numeral) L = 50
- $7 + 7 + 7 + 7 = 28$
- Will this shape tessellate?
Yes 
- 2, 5, 10, 17, 26, 37
- Double 11. 20
- $7 + 8 = 15$
- Which compass direction is this?
South 
- Which number is not a composite?
4, 8, 9, 11 11
- Write one thousand as a number. 1000
- The place value of 8 in 2.8 is tenths
- C  D
Measure line CD. 3.2 cm
- Halve 24. 12
- What year is the next leap year? 2024 
- $4 \overline{)840} = 210$ 






TUESDAY Date

- What would the time be in three quarters of an hour?
2.30 \rightarrow 3.15
- Which compass direction is this?
West 
- $9 + 6 = 15$
- $210 - 30 = 180$
- (Roman numeral) LV = 55
- On 6.9.06, which month are you in?
September
- How many months have 30 days? 4
- This polygon is known as a
Decagon 
- A  B
Measure line AB. 1.8 cm
- What is the meaning of 7 in 7352? 7000
- How many eggs are in a dozen? 12
- Double 15. 30
- Will this shape tessellate?
No 
- 110, 220, 330, 440, 550
- If you're in charge of a fleet of taxis and you need to order tyres for 6 vehicles—how many tyres do you order?
(Don't count the spares!) 24
- Halve 28. 14
- Was 1996 or 1998 a leap year? 1996
- Write the numeral two thousand and twenty-five. 2025
- $4 \overline{)528} = 132$ 
- $\$20.00 - \$13.20 = \$6.80$ 

WEDNESDAY Date

- Add forty-five minutes to this time.
9.50 \rightarrow 10.35
- $1000 - 5 = 995$
- $3 \overline{)624} = 208$
- On 9.10.09, which month are you in?
October
- If choc milk costs \$1.50 per litre, how much will you pay for 4 L?
\$6
- $1700 - 900 = 800$
- (Roman numeral) LIV = 54 km
- Will this shape tessellate?
No 
- Double 16. 32
- What is the name of this quadrilateral?
Trapezium 
- How many weeks are in a year? 52
- A  C
Measure line ABC. 4 cm
- $140 - 60 = 80$
- How many months have 31 days? 7
- How many eggs are in three dozen? 36
- $8 + 8 + 8 + 8 = 32$
- $\$20.00 - \$16.70 = \$3.30$
- 0.7, 0.8, 0.9, 1
- Which compass direction is this?
East 
- Halve 42. 21 

THURSDAY Date

- Add three quarters of an hour to this time.
2.20 \rightarrow 3.05
- X  Z
Measure line XYZ. 2.5 cm
- This is a Rhombus 
- $4 \overline{)200} = 50$
- (Roman numeral) LVII = 58
- On 12.5.08, which month are you in?
May
- Double 19. 38
- How many eggs are in five dozen? 60
- If you are riding a bike and the trip is 25 km long, how far have you to go after 7 km? 18 km
- Will this shape tessellate?
No 
- $12 \neq (8 \times 2) - 4$ true false
- $230 - 40 = 190$
- 15, 18, 19, 20, 21. Which number is not a composite? 19
- Which compass direction is this?
South-West 
- 1992 was a leap year. How many leap years have occurred since then?
7
- $6 + 9 = 15$
- Write the numeral five thousand, six hundred and nineteen.
5619
- Halve 50. 25
- $\$20.00 - \$8.90 = \$11.10$ 
- 0.3, 0.5, 0.7, 0.9, 1.1

Extension - August 30th